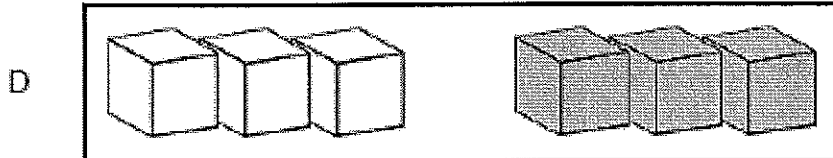
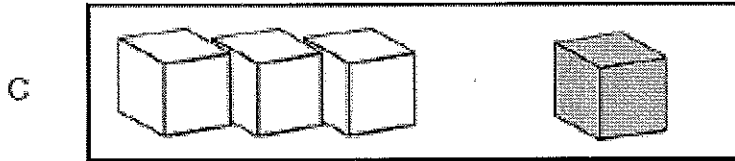
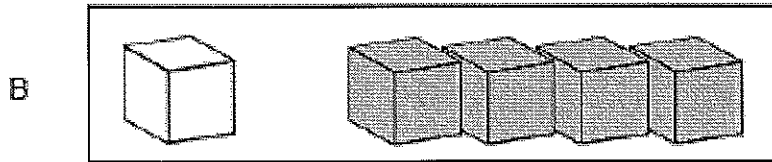



Which shows one way to make 5?




How many cubes?



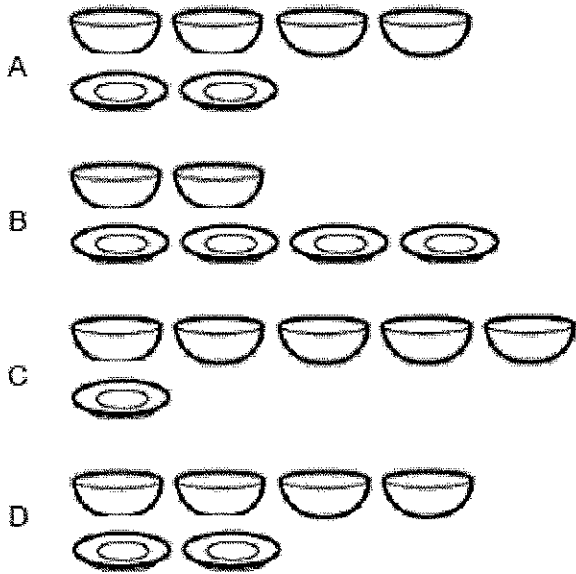
- A 2
- B 3
- C 4
- D 5

How many ducks?

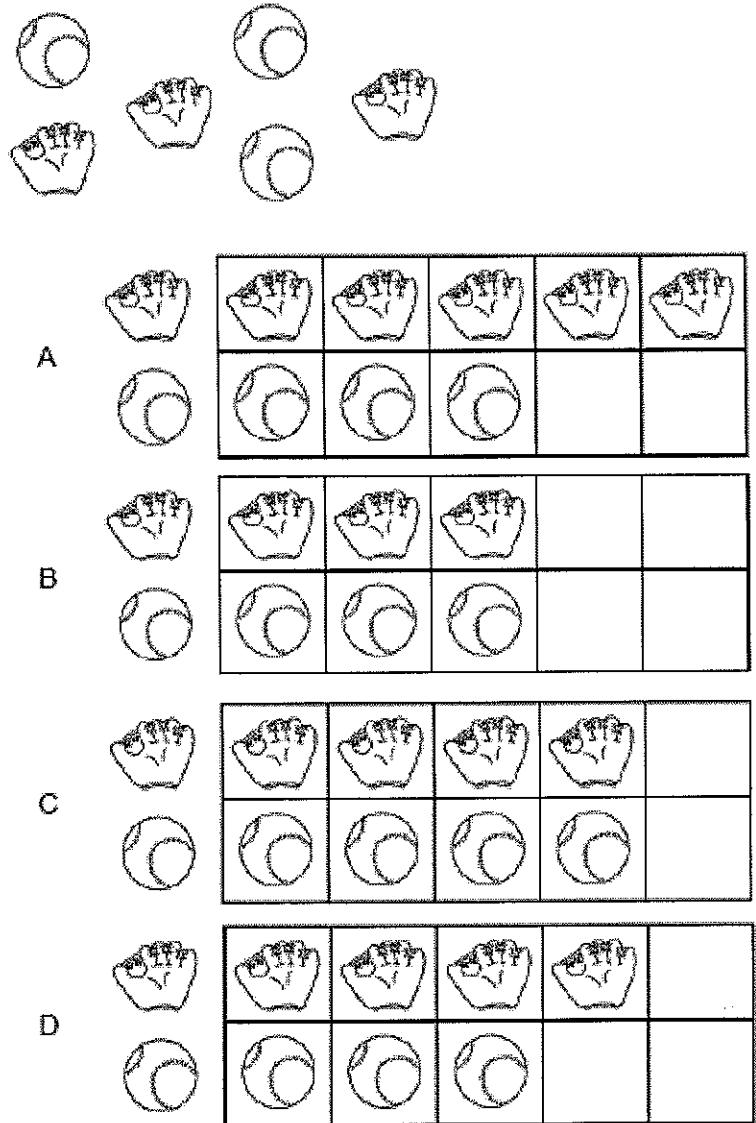


- A 4
- B 5
- C 2
- D 3

Which shows more plates than bowls?



Which graph shows the correct number of objects?



Which numbers are in order from smallest to largest?


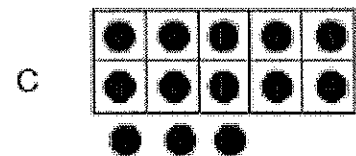


- A 1, 2, 4
- B 2, 1, 4
- C 4, 2, 1
- D 4, 1, 2

How many pretzels are there?




- A 6
- B 7
- C 8
- D 9

Which number is less than 10?




Look for a pattern.

How many strawberries will go in the empty box?





- A
- B
- C
- D

Which of these two numbers is greater?



- A 1
- B 5
- C 2
- D 3


Count the squares. Which shows 2 fewer?



Which number is less than 4?

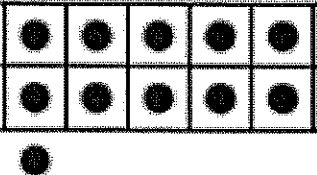
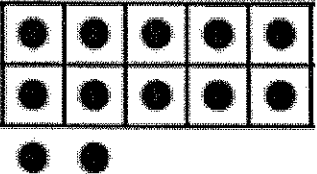




What is the third item in the row?




Which shows the number in the box?

14

- A 
- B 
- C 
- D 





How many birds are there?



- A 12
- B 11
- C 10
- D 9

Which number is missing?



- A 
- B 
- C 
- D 

Tim has 4 red apples. He has 2 yellow apples. Which sentence tells how many apples he has in all?



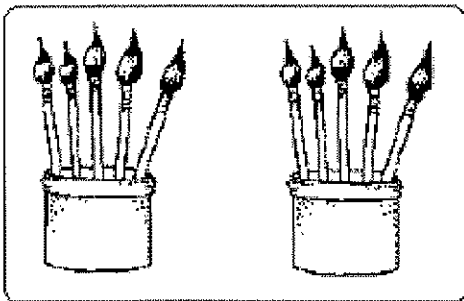
- A 2 and 2 is 4.
- B 4 and 2 is 6.
- C 4 and 4 is 8.
- D 4 and 1 is 5.

Which addition sentence matches the picture?



- A $3 + 1 = 4$
- B $2 + 1 = 3$
- C $3 + 2 = 5$
- D $2 + 2 = 4$

Which addition sentence matches the picture?



- A $5 + 5 = 10$
- B $5 + 2 = 7$
- C $3 + 3 = 6$
- D $4 + 5 = 9$

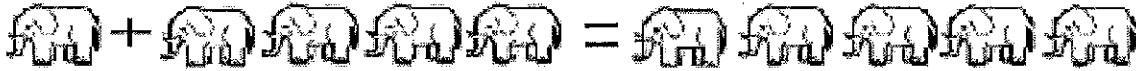
5 balls have stripes.

3 balls have dots.

Which picture shows how many balls all together?

- A 5 striped balls and 5 dotted balls.
- B 5 striped balls and 3 dotted balls.
- C 3 striped balls and 3 dotted balls.
- D 5 striped balls and 4 dotted balls.

Which number sentence tells about the elephants?



- A $1 + 2 = 3$
- B $2 + 2 = 4$
- C $1 + 4 = 5$
- D $2 + 4 = 6$


What is the difference?



8 - 3 =





- A 5
- B 6
- C 7
- D 8

Which number sentence tells about the leaves?

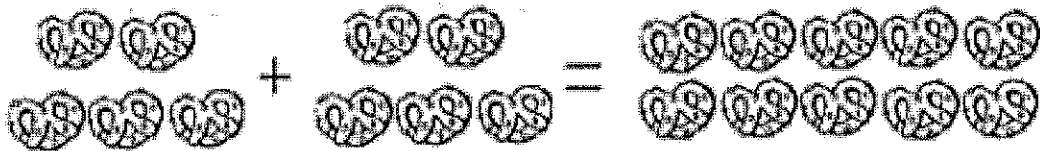


- A $4 + 3 = 7$
- B $4 + 4 = 8$
- C $5 + 4 = 9$
- D $5 + 5 = 10$

Which shows one way to make 5?




Which number sentence tells about the pretzels?



- A $3 + 7 = 10$
- B $6 + 3 = 9$
- C $4 + 4 = 8$
- D $5 + 5 = 10$

Which belongs with the others?



- A
- B
- C
- D

Which object is a square?

- A
- B
- C
- D

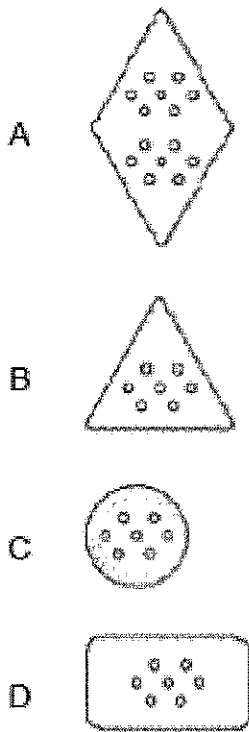
Which lizard is the shortest?

- A
- B
- C
- D

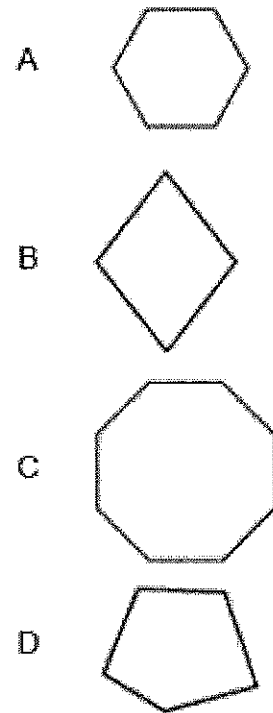
Which shape is a circle?

- A
- B
- C
- D

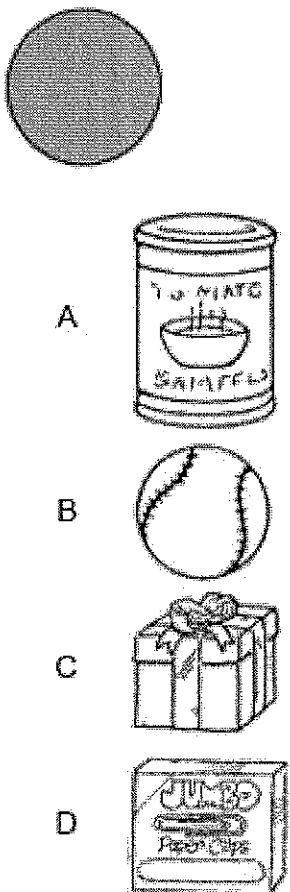
Which cracker is shaped like a triangle?



Which shape is a hexagon?



Which item has a flat surface that is a circle?



Which shape is the same as the flat surface of the tissue box?

